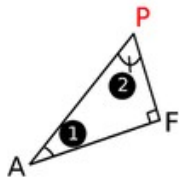
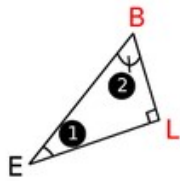
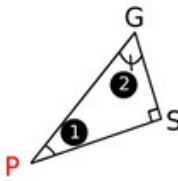
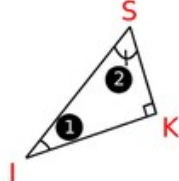
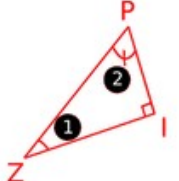


**2** Complète le tableau suivant en observant les informations données dans chaque ligne.

Triangle rectangle					
Hypoténuse	[AP]	[EB]	[PG]	[SI]	[ZP]
Côté adjacent à l'angle ①	[AF]	[EL]	[SP]	[IK]	[ZI]
Cosinus de l'angle ①	$\frac{AF}{AP}$	$\frac{EL}{EB}$	$\frac{PS}{PG}$	$\frac{IK}{IS}$	$\frac{ZI}{ZP}$
Côté adjacent à l'angle ②	[PF]	[BL]	[GS]	[SK]	[PI]
Cosinus de l'angle ②	$\frac{PF}{PA}$	$\frac{BL}{BE}$	$\frac{GS}{GP}$	$\frac{SK}{SI}$	$\frac{PI}{PZ}$