




2 Écris les nombres.




$$10 + 1 = \dots\dots$$



$$10 + \dots = \dots\dots$$



$$10 + 5 = \dots\dots$$



$$10 + \dots = \dots\dots$$

3 Écris le résultat.

a) $6 + 5 = 10 + \dots = \dots\dots$

b) $9 + 3 = 10 + \dots = \dots\dots$

c) $7 + 5 = 10 + \dots = \dots\dots$

d) $8 + 4 = 10 + \dots = \dots\dots$